



Solve each problem using a tape diagram.

- 1) Bianca had 65 pencils. If she used 44 of them, how many would she have left?
  
- 2) Haley listened to 81 songs on her mp3 player. 42 of them were pop and the rest were classical. How many classical songs did she listen to?
  
- 3) There were 87 people on the train. At the first stop 50 people got off. How many people are left on the train?
  
- 4) Amy had 44 3DS games. If she gave 19 to her friend, how many would she have left?
  
- 5) Olivia had 43 photos on her computer. She deleted 27. How many photos does she have left?
  
- 6) A waiter has 45 customers. If 35 left, how many customers would the waiter still have?
  
- 7) Sam had 85 cherries. He ate 38 of them. How many cherries does Sam have left?

**Answers**

1. \_\_\_\_\_

2. \_\_\_\_\_

3. \_\_\_\_\_

4. \_\_\_\_\_

5. \_\_\_\_\_

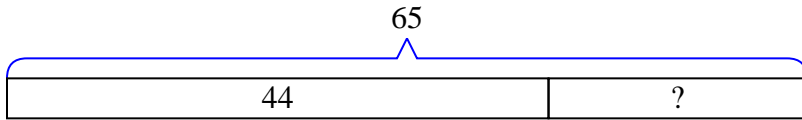
6. \_\_\_\_\_

7. \_\_\_\_\_

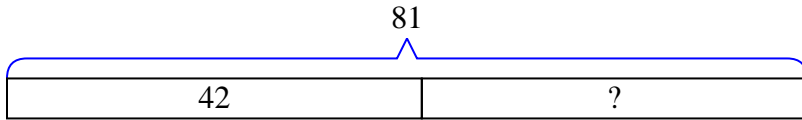


Solve each problem using a tape diagram.

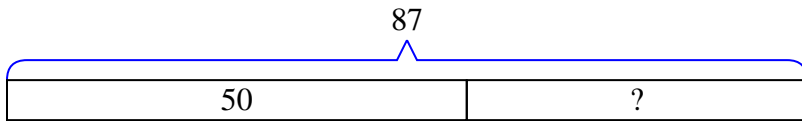
- 1) Bianca had 65 pencils. If she used 44 of them, how many would she have left?



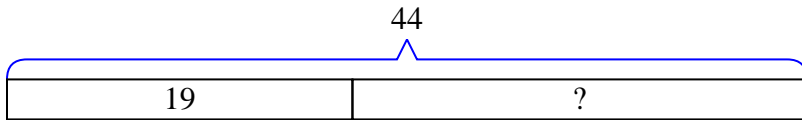
- 2) Haley listened to 81 songs on her mp3 player. 42 of them were pop and the rest were classical. How many classical songs did she listen to?



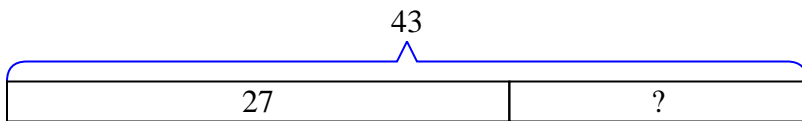
- 3) There were 87 people on the train. At the first stop 50 people got off. How many people are left on the train?



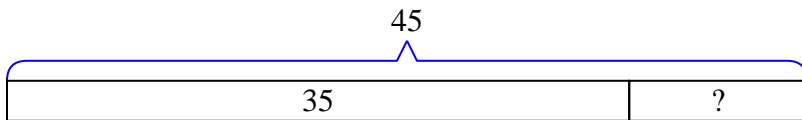
- 4) Amy had 44 3DS games. If she gave 19 to her friend, how many would she have left?



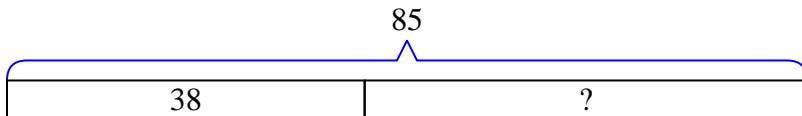
- 5) Olivia had 43 photos on her computer. She deleted 27. How many photos does she have left?



- 6) A waiter has 45 customers. If 35 left, how many customers would the waiter still have?



- 7) Sam had 85 cherries. He ate 38 of them. How many cherries does Sam have left?

Answers1. 212. 393. 374. 255. 166. 107. 47